



# 5.1 Angles

## Vocab

angle: formed by rotating a ray about its endpoint (called a vertex) from some initial position (called initial side) to some terminal position (called terminal side). Measure of an angle tells how much rotation there is.



positive angle: counterclockwise  
negative angle: clockwise

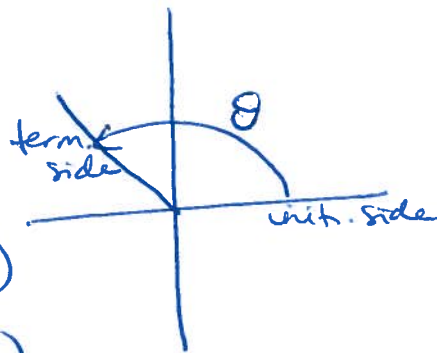


standard position: vertex at origin in Cartesian coordinate system; initial side on positive x-axis.

one revolution around circle =  $360^\circ$  (360 degrees)

$1^\circ = 60'$  (1 degree = 60 minutes)

$1' = 60''$  (1 minute = 60 seconds)



$$360^\circ = 2\pi \text{ radians}$$

★ always use radians when you need a unit-less measure.

$$\Rightarrow \frac{360^\circ}{2\pi} = \frac{180^\circ}{\pi} \text{ is a form of } \underline{\underline{one}}$$

coterminal angles: angles that both start on +ve x-axis and have same terminal side, even though they differ in how we write them down

## S.I Angles (cont)

Arc length: cut by a central angle (measured in radians) from a circle of radius  $r$  is denoted by  $s$  and  $s = r\theta$  (or  $\frac{s}{r} = \theta$ )



(this is also actually how radians can be defined)

---

Ex1 Convert + sketch

(a)  $60^\circ$

(b)  $-240^\circ$

(c)  $135^\circ$

(d)  $\frac{\pi}{4}$

(e)  $-2\frac{\pi}{3}$

(f)  $3\frac{\pi}{2}$

## S.1 (cont)

Ex 2 sketch and name reference angle (in radians)

(a)  $-225^\circ$

(b)  $85^\circ$

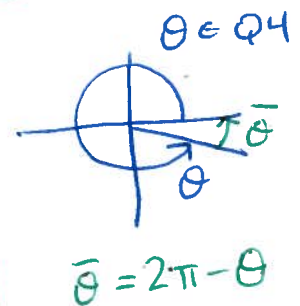
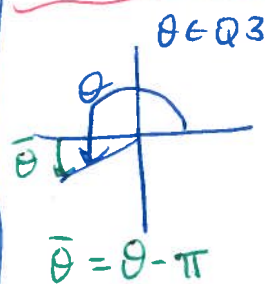
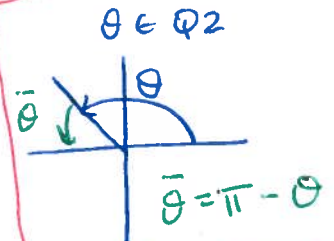
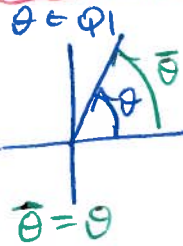
(c)  $\frac{11\pi}{6}$

(d)  $5\pi/3$

## Reference Angles

$\bar{\theta}$  is reference angle for  $\theta$  and it's the acute angle whose terminal side is terminal side of  $\theta$  + other side of angle is closest

x-axis.




note:

$\bar{\theta}$  is always +ve and  $0^\circ < \bar{\theta} < 90^\circ$

S.1 (cont)

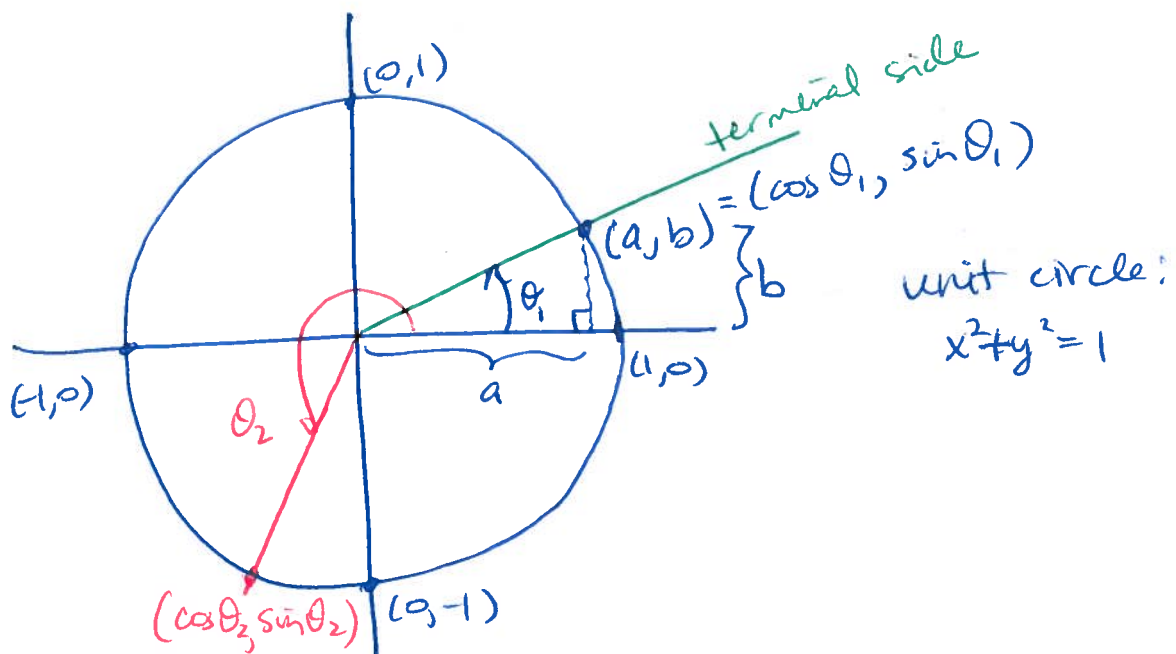
Ex 3 Find the length of the arc if central angle  $\theta = \frac{2\pi}{3}$  and radius of circle is  $r = 15\text{cm}$ .

Ex 4 Through how many revolutions does a pulley w/ 5 cm diameter turn when 1 m of cable is pulled through it w/o slippage?  
(1 m = 100 cm)



## S.2 Fundamentals (of Trigonometry)

This gives defs of trigonometric fns on a unit circle (a circle centered at  $(0,0)$  w/ radius of 1).



Defn

$$a = \cos \theta \quad b = \sin \theta$$

So every pt on the unit circle has coords  
 $(\cos \theta, \sin \theta)$

$$\tan \theta = \frac{\sin \theta}{\cos \theta} = \frac{b}{a}$$

$$\cot \theta = \frac{\cos \theta}{\sin \theta} = \frac{1}{\tan \theta} = \frac{a}{b}$$

$$\csc \theta = \frac{1}{\sin \theta} = \frac{1}{b}$$

$$\sec \theta = \frac{1}{\cos \theta} = \frac{1}{a}$$

## 5.2 (cont)

Ex1 Use the circle (on grid) below to answer these questions.

(a)  $\cos 250^\circ$   
 $\sin 250^\circ$

(b)  $\sin(-45^\circ)$

(c)  $\tan(-6)$

(d)  $\cot(5)$

(e)  $\csc(-3)$

## Pythagorean Identities

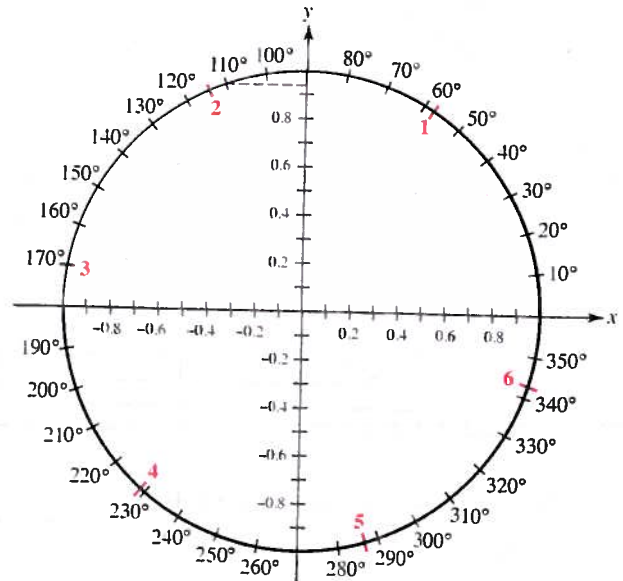
①  $\sin^2 \theta + \cos^2 \theta = 1$   
(this comes from unit circle defns)

②  $\frac{\sin^2 \theta}{\sin^2 \theta} + \frac{\cos^2 \theta}{\sin^2 \theta} = \frac{1}{\sin^2 \theta}$

$\Rightarrow 1 + \cot^2 \theta = \csc^2 \theta$

③  $\frac{\sin^2 \theta}{\cos^2 \theta} + \frac{\cos^2 \theta}{\cos^2 \theta} = \frac{1}{\cos^2 \theta}$

$\Rightarrow \tan^2 \theta + 1 = \sec^2 \theta$



## 5.2 (cont)

Ex 2 Specify which quadrant(s)  $\theta$  lies in, given the specified information.

(a)  $\sin \theta = -0.85$ ,  $\cos \theta > 0$

(b)  $\cot \theta > 0$

(c)  $\cos \theta < 0$  and  $\tan \theta > 0$

(d)  $\csc \theta = -1.35$



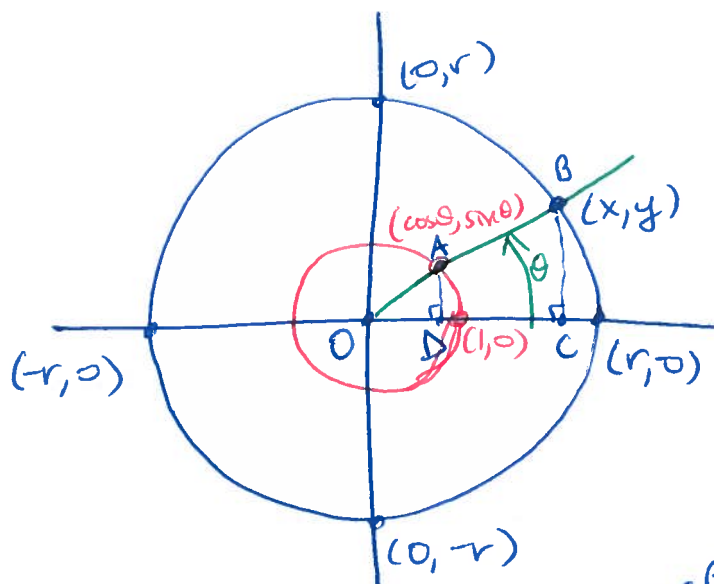
5.2 (cont)

Ex 3 Given  $\cos \theta = \frac{-5}{13}$  and  $\tan \theta > 0$ , find  
all other trig fn values of  $\theta$ .

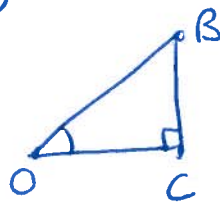


## S.3 Trigonometric Fns of Any Angle

Expand our defn of trig fns to a circle of any size, centered at origin w/ radius  $r$ .



By similar  $\Delta$ s.



$$\frac{AD}{OD} = \frac{BC}{OC}, \quad \frac{AD}{OA} = \frac{BC}{OB}, \quad \text{etc.}$$

$$\text{but } \frac{AD}{OA} = \frac{\sin \theta}{1} = \frac{BC}{OB} = \frac{y}{r} \Rightarrow y = r \sin \theta$$

$$\text{and } \frac{OD}{OA} = \frac{\cos \theta}{1} = \frac{OC}{OB} = \frac{x}{r} \Rightarrow x = r \cos \theta$$

$$\cos \theta = \frac{x}{r}, \quad \sin \theta = \frac{y}{r}, \quad \tan \theta = \frac{y}{x} \quad (x \neq 0)$$

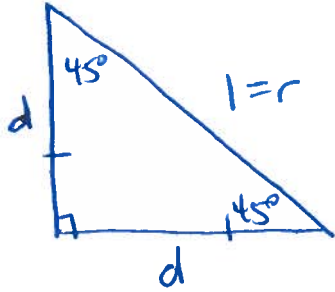
$$\cot \theta = \frac{x}{y} \quad (y \neq 0), \quad \csc \theta = \frac{r}{y} \quad (y \neq 0), \quad \sec \theta = \frac{r}{x} \quad (x \neq 0)$$

where  $(x, y)$  is any pt

## 5.3 (cont)

### Common Angles

①

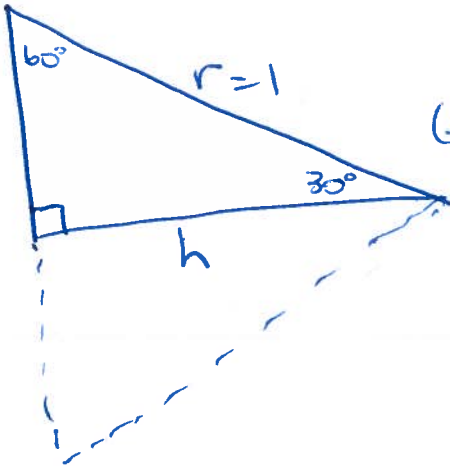


(isosceles right  $\Delta$ )

Assume  $r$  given, as unit circle radius)

②

$$\frac{1}{2}r = a$$



$30^\circ-60^\circ-90^\circ \Delta$ .

(assume  $r$  given)

(think of this as half an equilateral  $\Delta$ )

### 5.3 (cont)

★ memorize table of exact values (pg 308)

Ex 1 Find exact values.

(a)  $\csc 30^\circ$

(b)  $\csc \pi$

(c)  $\tan 90^\circ$

(d)  $\sin 0$

(e)  $\cos 0$

(f)  $\cot(\pi/4)$

(g)  $\sin(\frac{17\pi}{4})$

(h)  $\cos(\frac{9\pi}{2})$

## 5.3 (cont)

Ex 2 Find six trig fn values for angle whose terminal side goes through pt  $(-b, 1)$ .

Ex 3 Give exact values.

(a)  $\sin^2\left(\frac{\pi}{6}\right) + \cos^2\left(\frac{\pi}{3}\right)$

(b)  $\cos\left(\frac{\pi}{4} - \frac{\pi}{2}\right)$

(c)  $\frac{2\tan 60^\circ}{1 - \tan^2 60^\circ}$

(d)  $\cos\left(\frac{\pi}{4}\right) - \cos\left(\frac{\pi}{2}\right)$