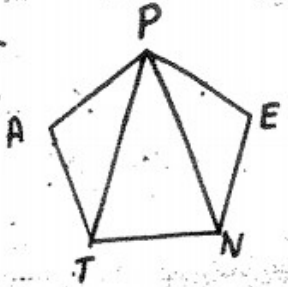


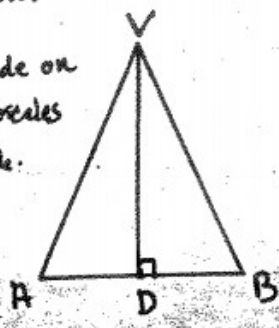
# CONGRUENT TRIANGLES

Which are congruent? Why?  
Write a congruence statement & Reason

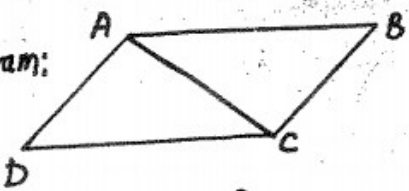
Regular Pentagon:



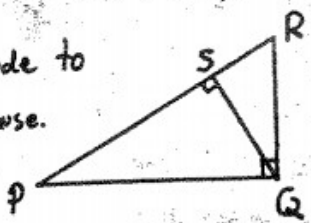
Altitude on an isosceles triangle.



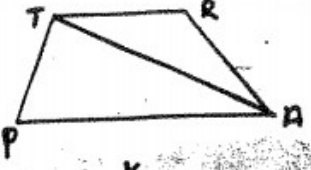
Parallelogram:



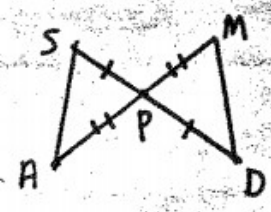
Altitude to hypotenuse.



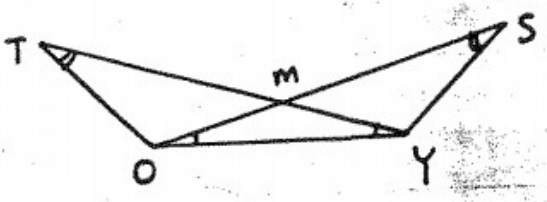
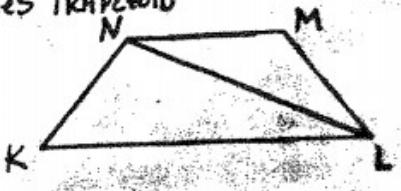
Trapezoid



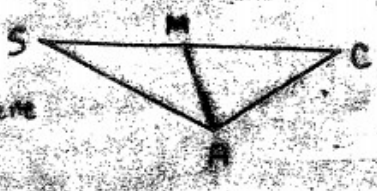
KITE:



Isosceles TRAPEZOID



Angle Bisector  
a scalene  
Triangle



70

Write the similarity statement.

